



BAL BHARATI PUBLIC SCHOOL SIMHADRI

SUMMER HOLIDAY HOME WORK 2022-23

CLASS 3

**ENGLISH
GRAMMAR WORKSHEET**

A Tick (✓) the correct options.

1. She are writing / is writing ✓ a letter.
2. The child is drinking / am drinking milk.
3. Grandpa am fishing / is fishing by the lake.
4. I is helping / am helping my mother in the kitchen.
5. We are waiting / am waiting for the test results.
6. Aneek is going / am going for the concert.
7. The lakes am blooming / is blooming with water lilies.
8. I am studying / are studying for the exams.
9. The people is standing / are standing at the railway station.
10. He am watching / is watching the news.



WORD PUZZLES

Name: _____ Date: _____

Birthday Party

DIRECTIONS: Fill in the puzzle grid with the name of each item following the number and direction indicated. Use the word bank if you get stuck.

<p>1 → </p> <p>16 → </p> <p>2 ↓ </p> <p>3 ↓ </p> <p>4 ↓ </p> <p>5 ↓ </p> <p>6 ↓ </p> <p>7 → </p> <p>8 ↓ </p> <p>9 → </p> <p>10 → </p> <p>11 → </p> <p>12 → </p> <p>13 ↓ </p> <p>14 → </p> <p>15 → </p>	<p>1 →</p> <p>2 →</p> <p>3 →</p> <p>4 →</p> <p>5 →</p> <p>6 →</p> <p>7 →</p> <p>8 →</p> <p>9 →</p> <p>10 →</p> <p>11 →</p> <p>12 →</p> <p>13 →</p> <p>14 →</p> <p>15 →</p>
--	--

<p>BALLOON BOW CAKE CANDLE CANDY CHOCOLATE CLOWN CUPCAKE FIREWORKS</p>	<p>GAMES GIFT ICE CREAM MUSIC PARTY HAT POPCORN PRIZE PUNCH</p>
--	---

© 2019 goodandbeautiful.com

HINDI

1. प्रतिदिन एक पेज सुलेख लिखिए और पढ़ने का अभ्यास करें।
2. छठ ऋतुओं से संबंधित चित्र चिपकाकर ऋतुओं का नाम लिखिए। (चार्ट पेपर में करें।)
3. आ से अः तक की मात्राओं के चार-चार शब्द लिखिए। (H-W Copy में लिखिए।)

SCIENCE

Make a model of parts of a plant

Reference Video: <https://youtu.be/lvgayuI2nVk>

Stick the pictures of different animals, based on their eating habits (Herbivores, carnivores, omnivores, scavengers) each category 5 pictures in chart paper


SOCIAL


Collect And Paste Pictures Of Different Food Items Of Different States


MATHS


Have Fun with Shapes


Colour the clown following the directions given below :

Triangles  Red

Squares  Yellow

Rectangles  Blue

Circles  Green



CBSE Class 3 Maths Worksheet

Numbers and place value

Fill in the blanks:

1. The of a digit in a numeral is the value of the digit itself at whatever place it may be.
2. The place value of is always 0 irrespective of its place.
3. How many tens are there in a hundred?
4. The largest 3 digit number is
5. If we take numbers, ending with 2, 4, 6, 8 or 0, they are called
6. The smallest 2- digits number is
7. The number 1 less than 100 is
8. All counting numbers from 1, 2, 3, 4,..... are also called

Fill in the blanks:

1. 8 hundreds, 5 tens, 5 ones, is written as
2. 9 hundreds, 8 tens, 0 one, is written as
3. 5 thousands, 8 hundreds, 0 ten, 4 ones, is written as
4. 2 thousands, 5 hundreds, 0 ten, 5 ones is written as

Fill in the blanks:

1. 470 means hundreds, tens, one
2. 524 means hundreds, tens, ones
3. 1325 means thousands, hundreds, tens, ones
4. 2435 means thousands, hundred, tens, one

Write the number name for given numeral:

1. 45 =
2. 123 =
3. 13 =
4. 3000 =
5. 657 =

Write the number name for given numeral:

1. 6 2 4 1 =
2. 3 9 4 2 =

Write the place value of the coloured digit :

1. 4 1 0 0 = 4. 2 5 8 6 =
2. 7 9 8 4 = 5. 9 5 4 3 =
3. 5 4 2 8 = 6. 3 1 0 5 =

Find the sum of the place values of 6 in

1. 366 3. 646
2. 4641 4. 6106

Find the difference between the place values of 2 in

1. 4242 3. 322
2. 2829 4. 1223

Observe the pattern and fill in the blanks :

1. 358, 360,
2. 1358, 2358,

Fill in the blanks:

1. Sum of two even numbers is number.
2. Sum of an odd and an even number is number.
3. Sum of two odd numbers is number.